



THE PRIME EXAMINATIONS 2022

P.7 PRE - PLE TRIAL SET II

SOCIAL STUDIES AND RELIGIOUS EDUCATION (Abridged Curriculum)

Time allowed 2 hours 15 minutes

INDEX NO:

Random No.

Personal No.



Top up your
classwork with
Prime Learn

www.prime-learn.com

Candidate's Name:

Candidate's Signature:

School Random No.

District ID:

READ THE FOLLOWING INSTRUCTIONS CAREFULLY

- The paper is made up of **two** sections: **A** and **B**.
- Do not write your **school** or **district** name anywhere on this paper.
- This paper has **two** sections: **A** and **B** Section **A** has **40** questions and section **B** has **15** questions. The paper has **7** printed pages.
- Answer **all** questions. All answers to both sections **A** and **B** must be written in the spaces provided.
- All answers **must** be written using a **blue** or **black** ball point pen or ink. Any work written in pencil other than graphs and diagrams will **not** be marked.
- Unnecessary **changes** in your work and handwriting that cannot easily be read may lead to **loss of marks**.
- Do **not** fill anything in the table indicated "For Examiners' use only", and those boxes inside the question paper.

FOR EXAMINERS' USE ONLY

QUESTION NUMBER	MARKS ATTAINED	INITIALS
1 - 10		
11 - 20		
21 - 30		
31 - 40		
41 - 43		
44 - 46		
47 - 49		
50 - 52		
52 - 55		
53 - 55		

APPROVED:

Consultant

Social Studies Department (PEC)

THE PRIME; SCHEMING FRAME WORKS, PUPILS' WORKBOOKS, LESSON COURSE BOOKS, HOLIDAY PACKAGES, LEARNING GAMES AND MORE...

Organised by: PRIME EDUCATIONAL CONSULT ©2022

Kampala

Turn Over

Section A (40marks)

1. Name the instrument used to measure the amount of rainfall at a weather station.

2. State any one example of children's rights.

3. Mention any one human activity which can cause an area to receive no rainfall throughout the year.


4. Why should a citizen obey the laws of a country?

5. Which political party won the first general elections in Uganda in 1961?

6. Give any one reason why the Bantu settled in the areas where they live today.

7. What causes wind?

8. Name the water passage that connects the Mediterranean Sea to the Red Sea.

9. Of what use is the road sign below to road users?
 _____
10. Give any one benefit Uganda enjoys by being a member of the East African Community.

11. State any one challenge the British faced in areas where they used direct rule.

12. Give any one reason why there are many street children in Uganda.

13. Mention any one district where tobacco is grown on a large scale in Uganda.

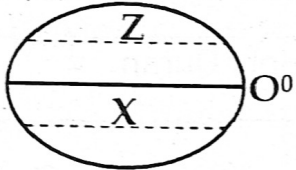
14. Give one reason why there are many mangrove forests in the coastal areas of East Africa.

15. Which arm of government decides whether somebody has broken the law or not?

16. Why did the Germans force the people of Tanganyika to grow cotton?

17. Give one reason why telephones are widely used as means of communication in many parts of Uganda.

18. State one way in which Omukama Kasagama benefited from the coming of Captain Frederick Lugard in Uganda.

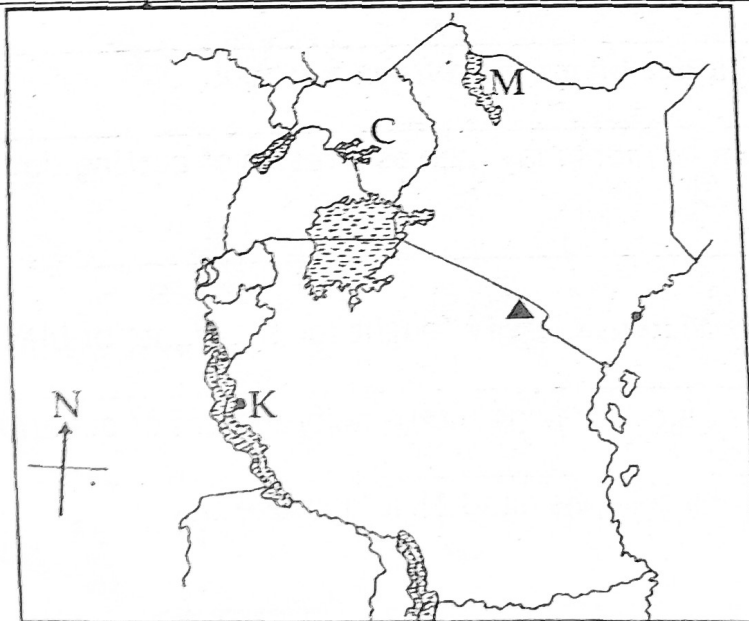
19. Mention any one peaceful method the Europeans used to extend their rule in East Africa.
20. Give any one reason why the coastal people (Arabs) staged a rebellion against the Germans in East Africa.
21. Why are the **Bachwezi** remembered in the political history of Uganda?
22. State any one problem that people who live in **Namib** desert face.
23. Mention one country which is crossed by the latitude marked x on the diagram below.

24. State any one contribution of kingdoms to the development of Uganda.
25. How did **Dr. David Livingstone** help to end slave trade in East and Central Africa?
26. Apart from water, give any other commodity that can be transported by pipeline.
27. Give any one advantage a farmer gets by growing crops and keeping animals at the same time.
28. Mention any one island country found in **Southern Africa**.
29. Give one way how a **notice board** is useful in a school.
30. State any one problem farmers may face as a result of cutting down forests in an area.
31. Give any one way how **Marcus Garvey** fought for the rights of black people.
32. Mention any one advantage of having multi-party system of governance.
33. State any one reason why persons aged 18 and above take part in National elections.
34. Name the largest type of fish caught in **Lake Victoria**.
35. Why is **Namugongo** shrine important in East Africa?

For questions 36 to 40, answer Either Christians or Islamic questions BUT not Both in a number.

36. Either: Name the angel who brought good news to Mary that she would be the mother of the Messiah.
- Or: Name the angel that used to bring revelations to Prophet Muhammad (PBUH).
37. Either: Give any one sign of the Holy Spirit on the day of Pentecost.
- Or: Give any one holy city in Islam.
38. Either: Mention the first book in the Holy Bible.
- Or: Mention the first surat (chapter) in the Holy Quran.
39. Either: What is sin according to Christianity?
- Or: What is sin according to Islam?
40. Either: Name one group of people who need special care in the Christian Community.
- Or: Name one group of people who need special care in the Muslim community.

Section B (60 Marks)

41. Study the sketch map of East Africa below and answer the questions that follow.



(a) Name the lake marked C.

(b) Mention any one economic activity carried out in town marked K.

(c) What is the compass direction of lake marked M from town K?

(d) How was the mountain peak shown on the map above formed?

42. (a) Give any two social reasons why Europeans colonised Africa.

(i) _____

(ii) _____

(b) Give any two benefits Europeans got from colonising Africa.

(i) _____

(ii) _____

43. (a) Mention any two groups of people who benefit directly from UNICEF.

(i) _____

(ii) _____

(b) Give any two ways in which UNICEF has contributed to the health of people in Uganda.

(i) _____

(ii) _____

44. (a) In which way does the building of good hotels promote tourism?

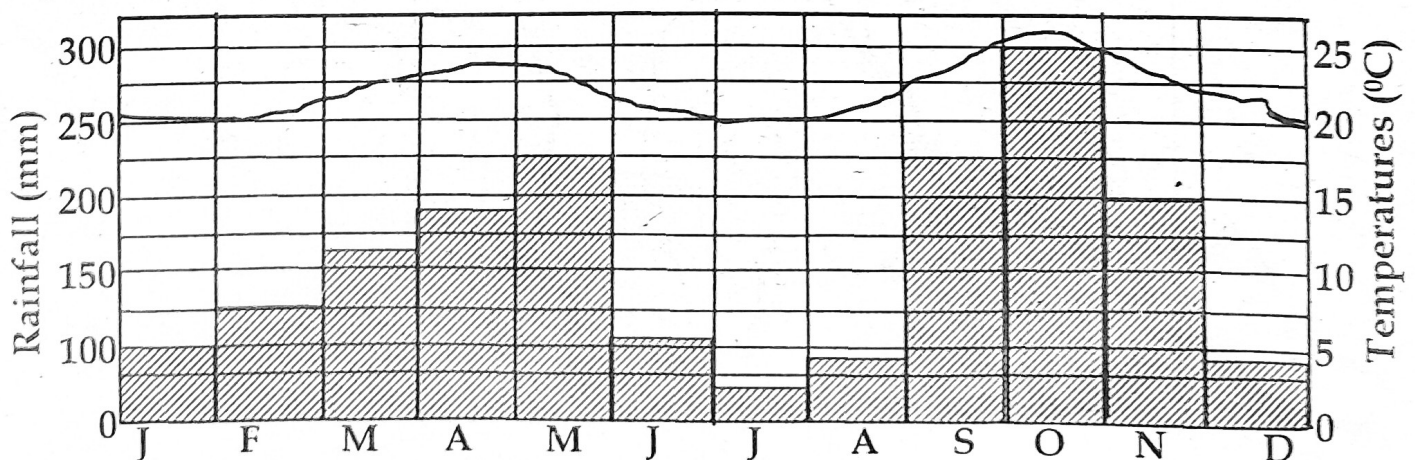
(b) Give any two other factors which have contributed to the growth of tourism in Uganda.

(i) _____

(ii) _____

(c) Mention any one benefit the government gets from game parks.

45. The graph below shows a certain type of climate. Study it carefully and answer questions that follow.



(a) Name the type of climate shown on the graph above.

(b) How does temperature affect rainfall on the graph?

(c) State one reason why the type of climate mentioned in (a) above good for crop growing.

(d) Mention any one traditional cash crop which grows well in this area.

46. (a) Give any two serious problems affecting the fishing industry in Uganda.

(i) _____

(ii) _____

(b) State any one possible solution to each of the problems you have mentioned in (a) above.

(i) _____

(ii) _____

47. (a) State any two goods which were bought by Arabs to East Africa.

(i) _____

(ii) _____

(b) Mention any two things which the Arabs wanted in East Africa.

(i) _____

(ii) _____

48. (a) Give any two causes of high population growth in Uganda.

(i) _____

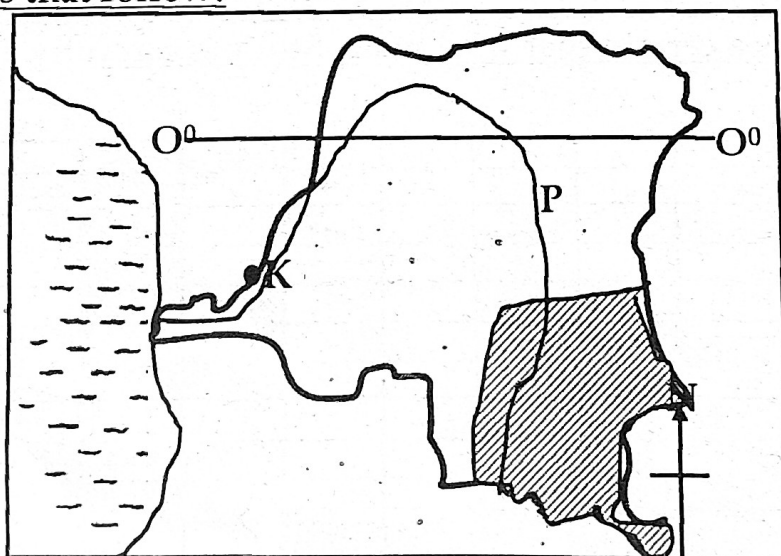
(ii) _____

(b) State any two economic advantages that Uganda has because of a high population.

(i) _____

(ii) _____

49. Study the sketch map of the Democratic Republic of the Congo and answer questions that follow.



(a) Name the town marked K on the map.

(b) Why is river marked P important to the people of the Democratic Republic of Congo?

(c) Mention any one major product got from the shaded region on the map.

(d) Give one reason why some natural resources in the Democratic Republic of Congo have not been exploited.

50. (a) Which country in East Africa was most affected by the first World War?

(b) Give any three ways how the country mentioned in (a) above was affected in the first World War.

(i) _____

(ii) _____

(iii) _____

For Questions 51 to 55, answer Either Christianity or Islamic Questions but not alternatives in a number.

51. **Either:**

(a) On what day do Christians celebrate the birth of Jesus Christ?

(b) Why was baby Jesus taken to Egypt after birth?

(c) Give any two ways through Jesus showed true love for the people.

(i) _____ (ii) _____

Or:

(a) Why did Prophet Muhammad leave Mecca to go to Medina?

(b) How did Muhammad's journey to Medina help to spread Islam?

(c) Give two reasons why Islam took long to spread in East Africa.

(i) _____

(ii) _____

52. **Either:** (a) Name one type of marriage that is recognised in Uganda.

(b) Give any two qualities which people married in church are expected to show

(i) _____ (ii) _____

(c) Give the commandment which protects married people.

Or: (a) What name is given to the marriage ceremony in Islam?

(b) Give any two qualities which people married in mosque are expected to show.

(i) _____ (ii) _____

(c) Give one condition which must be fulfilled before marriage is performed in Islam.

53. **Either:** (a) Why is **Abraham** regarded as the grandfather of all nations?

(b) Mention any **three** lessons Christians learn from Abraham's life.

(i) _____ (ii) _____

(ii) _____

Or: (a) Why is **Prophet Ibrahim** regarded as the grandfather of all believers?

(b) Give any **three** lessons, Muslims learn from Prophet Ibrahim.

(i) _____ (ii) _____

(ii) _____

54. **Either:** (a) Name the type of authority used by religious leaders in the church.

(b) Where do religious leaders get the authority they use in church?

(c) Mention any **two** ways through which Christian leaders use the authority mentioned in (a) above.

(i) _____

(ii) _____

Or: (a) Name the type of authority used by religious leaders in the mosque.

(b) Where do Muslim religious leaders get the authority they use in the mosque?

(c) Mention any **two** ways through which Muslim religious leaders use the authority mentioned in (a) above.

(i) _____

(ii) _____

55. **Either:** (a) Why did God send His son Jesus into the World?

(b) Mention any **two** ways in which Christians reconcile with God.

(i) _____

(ii) _____

(c) Give **one** benefit of reconciling with one another.

Or: (a) Name any **one** animal which a Muslim can give as a sacrifice to Allah.

(b) Mention any **two** ways in which Muslims reconcile with Allah.

(i) _____

(ii) _____

(c) Give **one** benefit of reconciling with one another.



Revision Tip.

Always make thorough use of the atlas when revising areas that are usually tested through map work and diagrams.